

CORNERSTONE JUNIOR SCHOOL

Revision activity 1 – P.4 lower class work

ENGLISH

Fill in the missing letters

1. b _ _ k
2. ro _ d
3. k _ nd
4. d _ rt
5. E _ st

Fill in the suitable word correctly

6. My father is sitting _____ the bench.
7. Allan is taller _____ John.
8. Do you prefer football _____ netball?
9. How old _____ you?
10. The school canteen is next _____ the library.

Use the correct form of the words in brackets to complete the sentences

11. The ball is in a _____ form. (circle)
12. That blue cup is _____ than the red one. (clean)
13. He _____ to school yesterday. (go)
14. We are _____ English now. (learn)
15. The boys were told to move _____. (slow)

Arrange in ABC order

16. metallic, metal, method, golden
-

17. woolen, brown, calm, tomatoes
-

Re-write these sentences giving one word for the underlined group of words

18. My sister has gone to a place where children go to learn.

19. The place where we keep our books at school is closed.

Give the opposite of these words

20. dirty _____

21. rough _____

22. polite _____

Give the plural forms of these words

23. key _____

24. road _____

25. church _____

Write in full

26. Rd. _____

27. won't _____

28. Sun. _____

Use these words in a sentence to show that you know the difference in their meaning

29. West _____

30. waste _____

Re-write as instructed in brackets

31. I went to the shop. I wanted to buy sugar. (Use.....because.....)

32. John is tall. Allan is not tall. (Use.....than.....)

33. It is a long way from Jinja to Kampala. (Use.....far.....)

34. Annet is a beautiful girl. Shiela is a beautiful girl. (Use: Bothand)

35. Our stream is near the office. (Use:.....next to.....)

36. I like matooke more than rice. (Use.....prefer.....to.....)

37. That is a broom. (Use: Those.....)

38. Ivan went to the hospital. He did not see the doctor. (Join using:.....but.....)

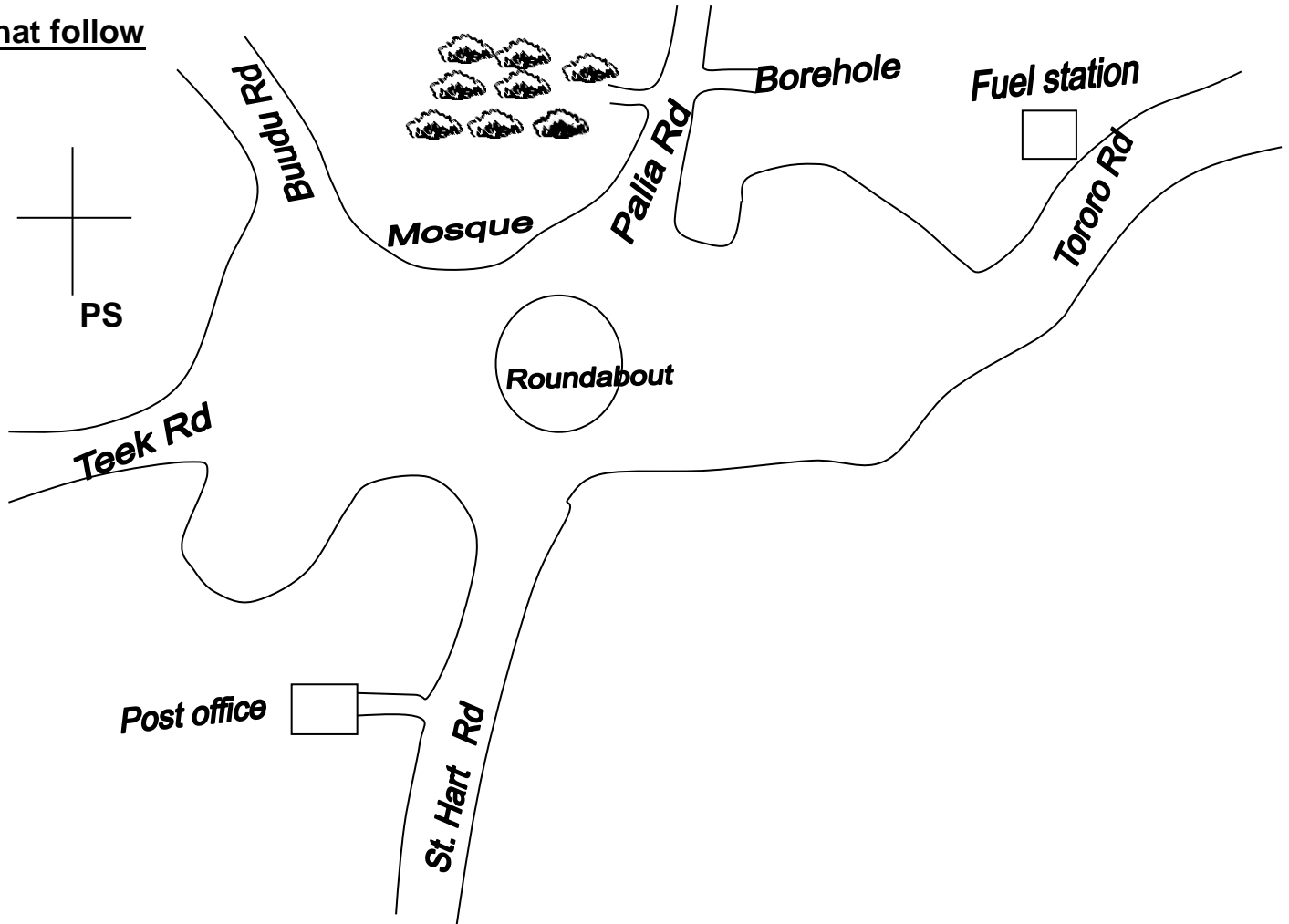
39. Paul is taller than all boys in our class. (Use.....is the.....)

40. The clinic is before the White House. (Use.....after.....)

41. **Complete this table correctly**

Positive	Comparative	Superlative
shy	_____	shyest
_____	uglier	_____
good	_____	best
_____	worse	_____
big	_____	biggest
happy	happier	_____
_____	cleverer	_____

42. The map below shows Mbarara Town. Study it carefully and answer the questions that follow



Questions

1. Which town does the above map show?

2. How many roads are there on the map?

3. What is opposite the swamp?

4. In which direction is Teek Road from the roundabout?

5. Which road goes to the post office?

6. In which direction is the swamp from the mosque?

7. How important is the borehole to the people of Mbarara?

8. Where do you think Juma who is a Moslem goes for prayers?



9. Write in full
 a) St. _____
 b) Rd. _____

MATHEMATICS

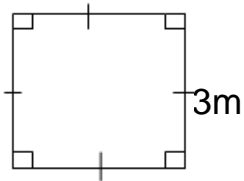
1. Multiply:

$$\begin{array}{r} 3 \\ + 6 \\ \hline \hline \end{array}$$

2. Workout: $\frac{9}{15} - \frac{7}{15} =$ _____

3. If  represents 7 bottles. How many bottles are represented by  ?


4. A spider moved around the figure below. Find the distance it moved.



5. Find the value of 9 in 795.

6. Express XIX in Hindu Arabic numerals.

7. Write down the unshaded fraction on the figure below.

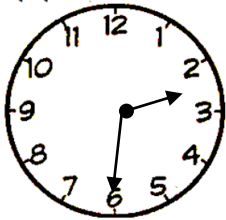


8. Convert 2kg to grams.

9. Expand 5829 using place values

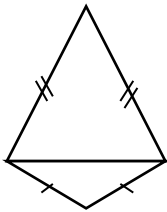
10. Multiply: 4×3 using repeated addition.

11. Tell the time on the clock face below



12. Given digits 4, 5 and 7. Form the biggest numeral.

13. Name the shape drawn below

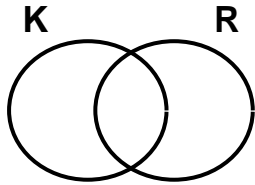


14. In a class of 48 pupils. 26 are boys. How many girls are in the class?

15. Write $\frac{2}{4}$ in words.

16. Given that set $K = \{ 1, 2, 3, 4, 5 \}$ and $R = \{ 0, 2, 4, 6 \}$

a) Represent the above information on the venn diagram



b) List the elements of $K \cap R$.

c) Find; $n(K \cup R)$

17. Kato has a mass of 37kg and Jovia has a mass of 46kg

a) Find their total mass.

b) Find the difference between their masses;

18. Find the missing numbers

a) $\square \times 3 = 24$

b) $25 - \square = 10$

c) $\square + 12 = 20$

19. Complete the mathematical statement using $>$, $<$, $=$

a) $3 + 0$ _____ 0×3

b) 3kg _____ 3000g

c) 1kg of feathers _____ 1kg of stones

d) $\frac{1}{2}$ _____ $\frac{1}{3}$

20. Draw the shapes below

square	rectangle	kite	circle

SCIENCE

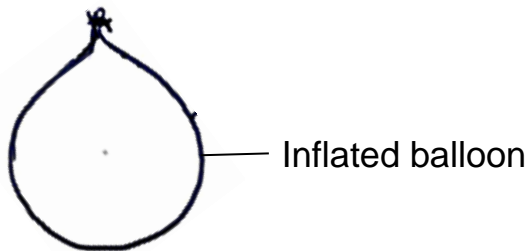
1. Why should people iron clothes?

2. Name one useful insect in the environment.

3. How does mulching control soil erosion?

4. Mention one raw material for making mats.

Use the diagram below to answer question 5



5. Which property of air is shown by the balloon above?

6. Why does a fish move from one place to another?

7. State one example of non flowering plants.

8. Name the element of weather that helps in the drying of harvested crops.

9. State one way of managing natural changes in the environment.

10. Give one role of a child in a family.

11. Which part of air occupies 78% in the atmosphere?

12. What name is given to a young one of a dog?

13. Write one characteristic of social insects.

14. Mention one natural cause of change in the environment.

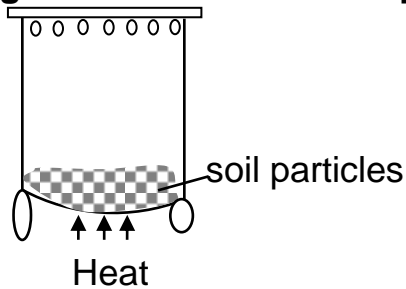
15. Why do farmers practice crop rotation?

16. Which component of soil makes it dark?

17. Write one PIASCY message.

18. Write one way of controlling malaria in a home.

Use the diagram below to answer question 19



19. Which property of soil is shown above?

20. How are gills useful to a fish?

SECTION B

21. a) Give one man made source of water.

b) Identify two uses of water in our homes.

i) _____

ii) _____

c) State one way water in a well can be protected against contamination.

22. a) Write one sentence to show the meaning of wind.

b) Give any one importance of wind to a crop farmer.

c) Why is carbondioxide commonly used in fire extinguishers?


d) State one use of oxygen to people.

23. a) Give one common accident in kitchens.

b) Why is it necessary for a casualty to be given first aid?

c) Give one way we can prevent accidents on the road.

d) In the space below draw a stretcher.



24. a) How is the sun important in rain formation?

b) Identify any two processes involved in rain formation.

i) _____

ii) _____

c) Apart from helping in rain formation, give one other use of the sun to people.

25. a) Which body organ enables a P.4 child to know whether sugar has been put in tea?

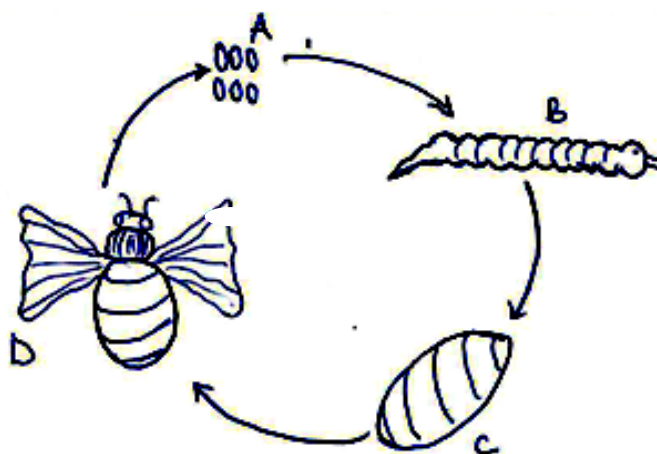
b) State one way stomata in plants are similar to spiracles in insects.

c) Identify two ways of caring for our body organs.

i) _____

ii) _____

26. Use the diagram below to answer questions about it



a) Name the stage marked B and C.

i) B _____ ii) C _____

b) Give any one insect with the life cycle as the one shown above.

c) Which of the above stages is dangerous to human health?

27. a) Write any two materials a P.4 child can use to clean his / her body.

i) _____

ii) _____

b) State one disease that spreads due to poor personal hygiene.

c) How does brushing of teeth help to control tooth decay?

28. Match the following weather instruments and their uses

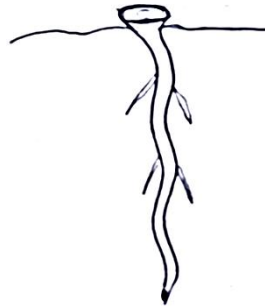
Anemometer	- Measures air pressure
Rain gauge	- Shows the strength of wind
Wind sock	- Measures the speed of wind
Barometer	- Shows the strength of wind

- i) Anemometer _____
- ii) Rain gauge _____
- iii) Wind sock _____
- iv) Barometer _____

29. a) Write any one reason why people eat food.

- b) Mention two classes of a balanced diet.
i) _____
ii) _____
- c) State one way of preventing food contamination.

30. Study the root system below and answer questions that follow



- a) Name the root system drawn above.

- b) State one crop with such root system.

- c) Give one way roots are important to plants.

- d) Which part of roots help to absorb water and mineral salts from the soil?

R.E

1. **Either:** In which part of the Bible do we find the story of creation?

Or: How do we call the Holy book for Muslims?

2. **Either:** What did God create on the first day?

Or: What did Allah create on the first day?

3. **Either:** What should a good Christian do to someone who wrongs him or her?

Or: What should a good Christian do to someone who wrongs him or her?

4. **Either:** Give the main reason why God created day and night.

Or: Give the main reason why Allah created day and night.

5. **Either:** For how many days do Christians fast?

Or: For how many days do Muslims fast?

6. **Either:** Who is regarded as the last prophet in Christianity?

Or: Who is regarded as the first prophet in Islam?

7. **Either:** What is a prayer?

Or: What is salat?

8. **Either:** Name the holy place of worship for Christians.

Or: Name the holy place of worship for Muslims.

9. **Either:** Why is Angel Gabriel important in Christianity?

Or: Why is Angel Jibril important in Islam?

10. **Either:** What was the first miracle performed by Jesus?

Or: Who is the founder of Islam?

11. **Either:** Name the land that was promised to Abraham.

Or: Which prophet in Islam built the Kaaba?

12. **Either:** How did man spoil his relationship with God?

Or: How did man spoil his relationship with Allah?

13. **Either:** Mention any one way God speaks to his people?

Or: Mention anyone way Allah speaks to his people.

14. **Either:** What immediate punishment was given to Adam and Eve for disobedience?

Or: What immediate punishment was given to Adam and Hawa for disobedience?

15. **Either:** Give the main reason why God instructed Noah to build the ark.

Or: Give a main reason why Allah instructed Nuhu to build the ark.

16. **Either:** Who was the mother of prophet John the Baptist?

Or: Who was the mother of prophet Muhammad?

17. **Either:** Name any one person Jesus raised from the dead.

Or: Name any one miracle prophet Isa performed.

18. **Either:** Why is mountain Sinai important in Christianity?

Or: Why is mountain Jabal-Al-Nour important in Islam?

19. **Either:** Name any one prophet found in Christianity.

Or: Name any one Messianic Prophet found in Islam.

20. **Either:** Draw any one symbol found in Christianity



Or: Draw any one symbol found in Islam



21. Either:

a) Who is a leader?

b) Write down any two qualities of a good leader.

i) _____

ii) _____

c) Name any one leader found in the church.

Or:

a) Who is a leader?

b) Write down any two qualities of a good leader.

i) _____

ii) _____

c) Name any one leader found in the church.

22. Either

a) Who were the apostles?

b) Name any two apostles of Jesus.

i) _____

ii) _____

c) What does the name Thomas mean?

Or:

a) Who are Caliphs?

b) Name any two caliphs you know.

i) _____

ii) _____

c) How were the caliphs helpful to Prophet Muhammad?

23. Either: a) What is prayer?

- b) Mention any two types of prayers Christians make to God
i) _____
ii) _____
- c) Why would a Christian pupil pray before eating?

24. Both: Write down any two ways man can take care of the following creatures that God made;

- i) Lakes _____

- ii) Plants _____

25. Either:

- a) Who is a prophet?

- b) Give any two prophets found in Christianity.
i) _____
ii) _____
- c) Why don't some people believe in prophets today?

Or:

- a) Who is a prophet?

- b) Give any two prophets found in Islam.
i) _____
ii) _____
- c) Mention any one role of prophets in Islam.

26. Both:

- a) Name the person who received the Ten Commandments

- b) Write down any two of the Ten Commandments received by the above mentioned person.
i) _____
ii) _____
- c) Why did God give his people the Ten Commandments?

27. Either:

- a) What name is given to the fasting period for Christians?

- b) What did the following represent in the last supper;
 i) bread? _____
 ii) wine? _____
- c) Why did Jesus wash the apostles' feet?

Or:

- a) What name is given to the fasting period for Muslims?

- b) Give any two reasons why Muslims fast.
 i) _____
 ii) _____
- c) How does Allah reward those Muslims who fast?

28. Both:

- a) Give the meaning of the term honesty.

- b) Mention any two honest actions among pupils.
 i) _____
 ii) _____
- c) Write down any one benefit of being honest.

29. Either: Match list A to list B correctly

List A	List B
Holy Thursday	- Marks the end of Lent period
Good Friday	- Jesus' resurrection
Easter Sunday	- Jesus was arrested
Palm Sunday	- Jesus started the sacrament of Holy Communion

- i) Holy Thursday _____
 ii) Good Friday _____
 iii) Easter Sunday _____
 iv) Palm Sunday _____

Or: Match list A to list B correctly

List A	List B
Amina	- Foster mother of prophet Muhammad
Abubaker	- Uncle of prophet Muhammad
Abutwalib	- Caliph of prophet Muhammad
Halima	- Mother of prophet Muhammad

i) Amina _____

ii) Abubaker _____

iii) Abutwalib _____

iv) Halima _____

30. Both:

a) What is a talent?

b) Mention two examples of abilities / talents God gives us.

i) _____

ii) _____

c) Suggest any one way we can use our talents.

SECTION A (40 MARKS)

1. Write the motto of your school.

2. Name one item used in keeping peace and security.

3. Give the use of a compass to a pilot.

4. State the role of a teacher in your community.

5. Name one domestic animal which does not provide us with milk

6. State the opposite of NNE direction on a compass.

7. Mention one advantage of a nuclear family over an extended family.

8. What are social services?

9. State one use of traffic lights to road users in our sub-county.

10. Who heads a family?

11. Why are road signs put on roads in our district?

12. Name one product got from clay soil.

13. Why is rice grown in swampy areas?

14. What is child abuse?

15. How can a P.4 child keep him/ herself smart when going to school?

16. Why do most people carryout farming on plateaus?

17. Give any one way of keeping peace at school.

18. Victoria was going to school in the morning and saw her shadow on the left hand side. In which direction was her school?

19. Mention one importance of school holidays to P.4 pupils.


20. What is a homestead?

21. How is a picture different from a map?

22. Name one important place in your district.

23. What is the use of a watering can to a farmer?

24. State the importance of a weather station to your community.

25. Draw and name one product got from clay.

26. What problem will a map reader face using a map without a compass direction.

27. In which one way are cooks important in a school?

28. Mention one activity you can do to keep the environment clean.

29. Give one use of forests in our district.

30. How is a dust bin important in a classroom?

31. What is swamp drainage?

32. Mention one advantage of having enough capital when starting a project.

33. Name the major line of latitude marked O^0 on maps and globes.

34. Give the use of a key on a map.

35. Why do farmers keep their money in banks?

Answer **Either** or **Or** but not both unless instructed to do so

36. **Either:** Name one symbol of a Christian family.

Or: Name one symbol of a Muslim family.

37. **Either:** State the work of a pastor in a church.

Or: State the work of a Sheikh in a Mosque.

38. **Either:** Mention the creature God created last.

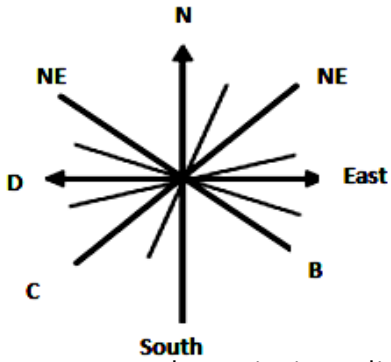
Or: Mention the creature Allah created last.

39. **Either:** How is a church important in our community?

Or: How is a mosque important in our community?

40. **Either:** What is lent?

Or: Write a brief about Ramadhan.



a) Name the missing directions on the above compass direction

A _____ B _____

C _____ D _____

42.a) What is the name given to the person who makes furniture?

b) How are the following people important in our division?

i)teacher _____

ii)farmer _____

iii)nurse _____

43.a) What is fishing?

b) What is the commonest type of fish caught in Uganda?

c) Write down any two ways fish can be preserved at home.

i) _____

ii) _____

44.a) What is a legend?

b) Who is believed to have been the wife of Kintu?

c) Apart from the legend of Kintu and Nambi, give any other two examples of legends you know.

i) _____

ii) _____

45.a) What term is used to mean the sending and receiving of messages?

b) Write down any two examples of news papers in your community.

i) _____

ii) _____

c) Why is newspaper communication not commonly used in villages?

46.a) Which bank controls all other banks in Uganda?

b) State any two values of banks to people in your community.

i) _____

ii) _____

c) Give any one example of Commercial banks in Uganda.

47.a) What are food crops?

b) Which products are got from the following crops?

i) cotton _____

ii) sugarcane _____

iii) tea _____

48. Match list A to List B correctly

List A

List B

Security

Drivers

Education

Nurses

Transport

Teachers

Health

Police

49. a) What is the biggest lake in Uganda?

b) Write down any two dangers of lakes and rivers to people.

i) _____

ii) _____

c) Give any one danger faced by people living near water bodies.

50.a) Who is a leader?

b) Write down any two qualities of a good leader.

i) _____

ii) _____

c) State any one way people become leaders in our communities.

From questions 51 – 55 answer *Either* for Christianity or *Or* for Islam but not Both unless told to do so.

51. Either

a) What is a prayer?

b) Write down any two requests made in the Lord's prayer.

i) _____

ii) _____

c) Give one reason why people should pray.

Or:

a) What is the meaning of the term Salat?

b) Give any two obligatory prayers said by Moslems in a day.

i) _____

ii) _____

c) Why do Muslims pray every day?

52. BOTH

- a) In which book of the Bible do we find the story of creation?

- b) What did God create on the last day?

- c) What punishments did the following receive for disobeying God?
i)serpent?_____
- ii)Eve?_____

53. **Either**

- a) State the commandment that guides us to love and respect our parents?

- b) Apart from the above commandment, mention any other two commandments you know as given to Moses by God.
i)_____
- ii)_____
- c) Why did God give the Ten Commandments to the Israelites?

Or:

- a) What is ablution?

- b) Mention any three body parts that Muslims clean before performing prayers.
i)_____
- ii)_____
- c) Give any one reason why Muslims clean their bodies before prayers?

54. **Either:**

- a) Why was Jesus sent to us?

- b) On which day did Jesus share the last supper with his disciples?

- c) What did the following items represent during the last supper
i) bread?_____
- ii) wine?_____

Or:

- a) Who built the ark?

- b) How many people entered the ark?

- c) Mention any one sons of the person in (a) above who entered the ark.
i) _____
- d) Why did God send floods to the people during that time?
ii) _____

55. **Either:**

- a) What is a parable?

- b) Write down any two examples of parables you know.
i) _____
ii) _____
- c) Give any one reason why Jesus used parables.

Or:

- a) What are hadith?

- b) State any two hadiths in Islam
i) _____
ii) _____
- c) Why did prophet Muhammad (P.B.U.M) use hadiths?

END